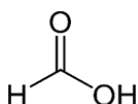


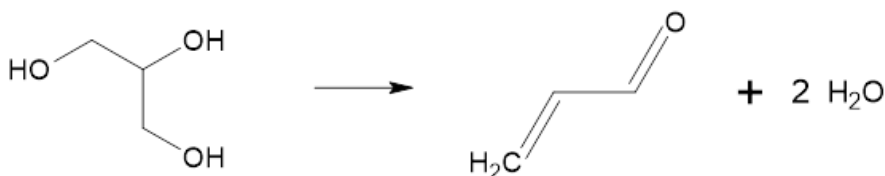
Zadanie 1.1

wzór estru	wzór kwasu
$\text{CH}_3\text{-CH}_2\text{-COO-CH}_3$	$\text{CH}_3\text{-CH}_2\text{-CH}_2\text{-COOH}$
$\text{H - COO-CH}_2\text{-CH}_2\text{-CH}_3$	$\text{CH}_3\text{-CH(CH}_3\text{)-COOH}$


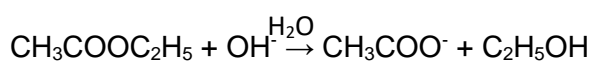
Zadanie 1.2



Zadanie 2



Zadanie 3.1



Zadanie 3.2

119 cm³

Zadanie 4

